



What Happened to the Ice Cube?

When you put an ice cube on top of the sheet of paper, make a prediction about where you think the ice cube will melt fastest.

Black Sheet of Paper

White Sheet of Paper





Observations when the ice cube is on top of the sheets of paper.

When you put an ice cube under the sheet of paper, make a prediction about where you think the ice cube will melt fastest.

Black Sheet of Paper

White Sheet of Paper



Observations when the ice cube is on top of the sheets of paper.

Sketch what happens to sunlight when it hits each of the following.

Black Sheet of Paper



White Sheet of Paper



Indicate where the sun would be
for the person using the umbrella to be shaded from the sun.

