

## Earth's Water is Found Where?

What are places that water is found on the Earth?






**Total: 1000 ml**

**Saltwater = \_\_\_\_\_ml**

**Freshwater = \_\_\_\_\_ml**

Look back at your list above and divide your water sources into two categories – freshwater and saltwater.

Freshwater Sources	Saltwater Sources



---

**Label each amount**

---

**What does each amount represent?**

**Explain how water is distributed on the Earth. Make sure to describe saltwater versus freshwater and what the different types of freshwater are.**

